

Name: \_\_\_\_\_ Date: \_\_\_\_\_

## Rotary Encoders & Human-Computer Interaction — Pre-Activity Worksheet

1. Do you know what a rotary encoder is? If so, please explain what a rotary encoder is as best you can.

---

---

---

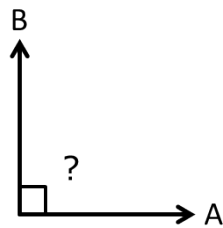
2. Have you ever used a rotary encoder? List some examples of devices that have rotary encoders:

---

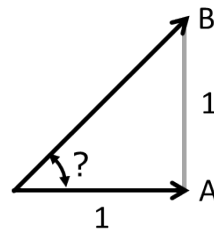
---

3. How familiar are you with the topic of angles? Rate from 1 (not familiar) to 10 (very familiar) \_\_\_\_\_

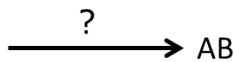
4. What do you think is the angle shown in each picture? (Write the answer in degrees)



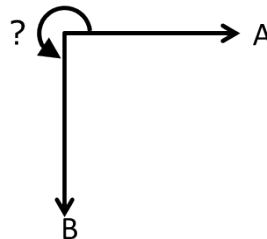
\_\_\_\_\_ degrees



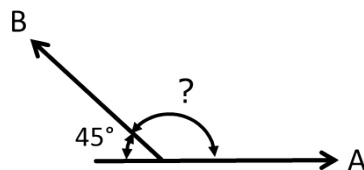
\_\_\_\_\_ degrees



\_\_\_\_\_ degrees



\_\_\_\_\_ degrees



\_\_\_\_\_ degrees